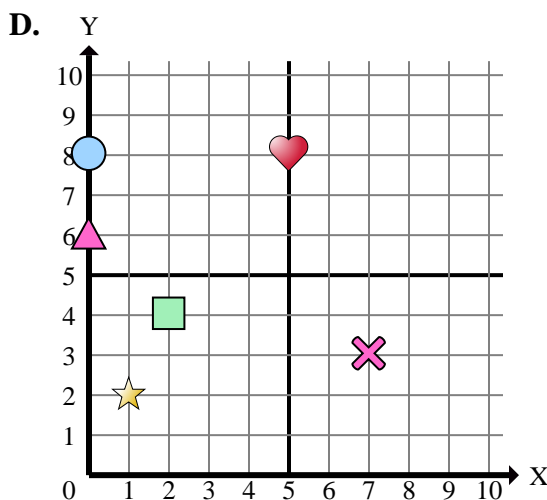
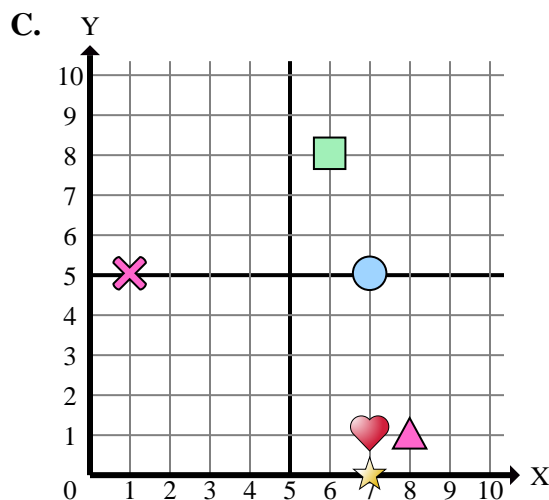
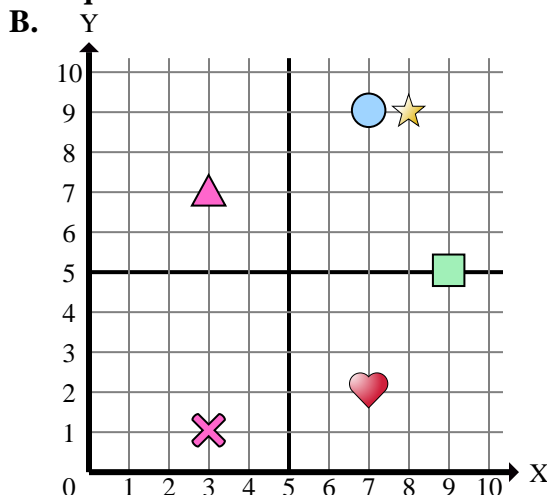
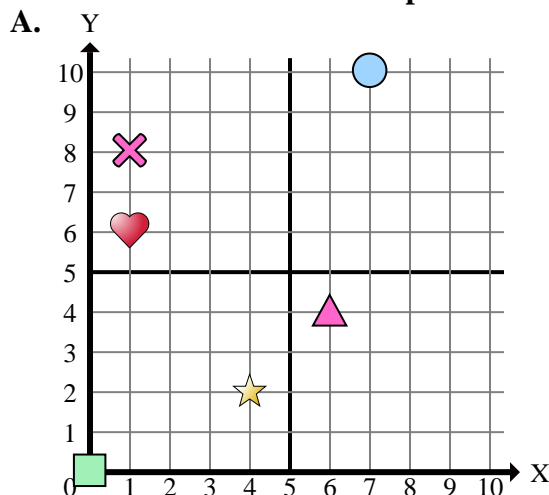




Determine which coordinate plane answers each question.

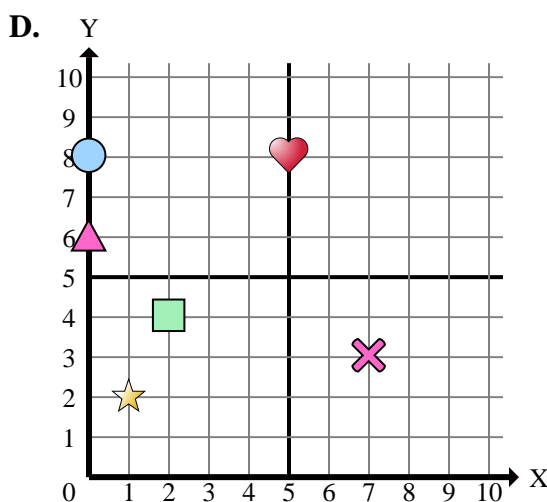
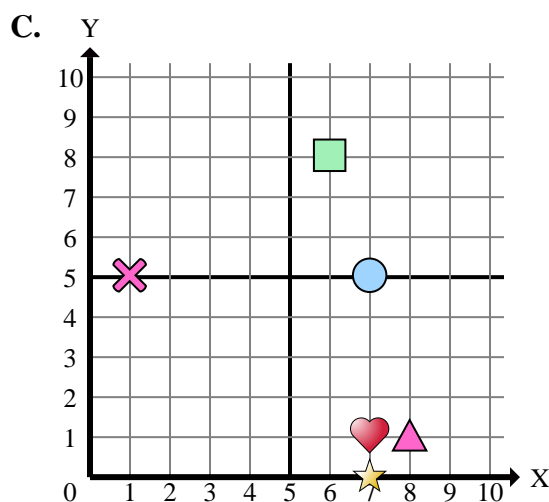
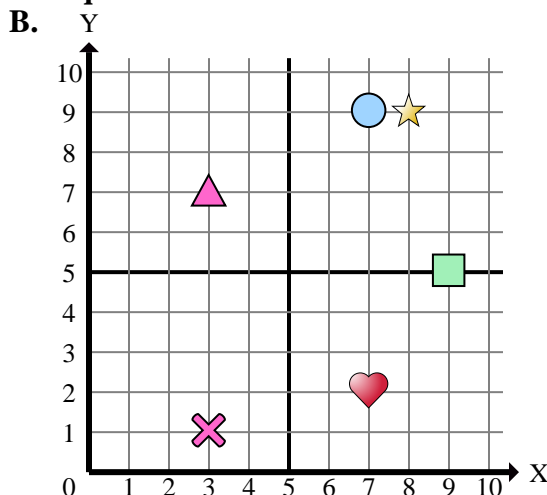
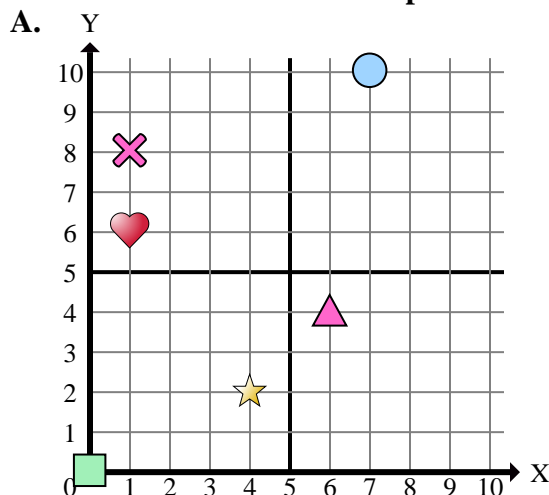
**Answers**

1. _____
2. _____
3. _____
4. _____
5. _____
6. _____
7. _____
8. _____
9. _____
10. _____
11. _____
12. _____
13. _____
14. _____
15. _____

- 1) Which coordinate plane has a shape at (6 , 8)?
- 2) Which coordinate plane has a shape at (1 , 2)?
- 3) Which coordinate plane has a shape at (6 , 4)?
- 4) Which coordinate plane has a shape at (0 , 8)?
- 5) Which coordinate plane has a shape at (8 , 1)?
- 6) Which coordinate plane has a shape at (1 , 6)?
- 7) Which coordinate plane has a shape at (1 , 8)?
- 8) Which coordinate plane has a shape at (7 , 9)?
- 9) Which coordinate plane has a shape at (8 , 9)?
- 10) Which coordinate plane has a shape at (7 , 1)?
- 11) Which coordinate plane has a shape at (5 , 8)?
- 12) Which coordinate plane has a shape at (7 , 10)?
- 13) Which coordinate plane has a shape at (0 , 6)?
- 14) Which coordinate plane has a shape at (7 , 3)?
- 15) Which coordinate plane has a shape at (2 , 4)?



Determine which coordinate plane answers each question.

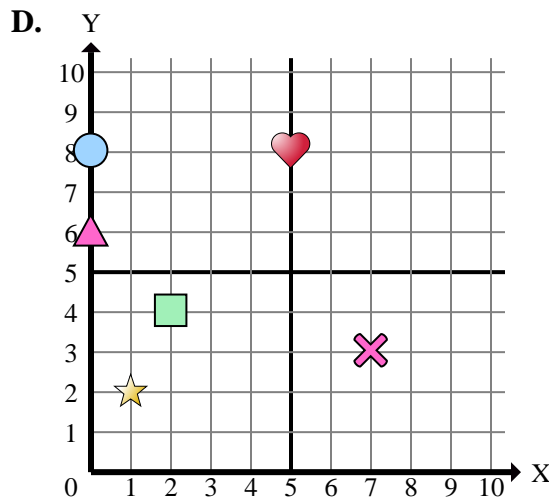
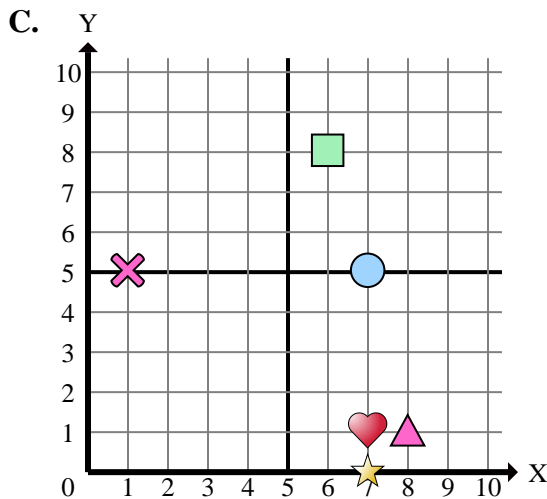
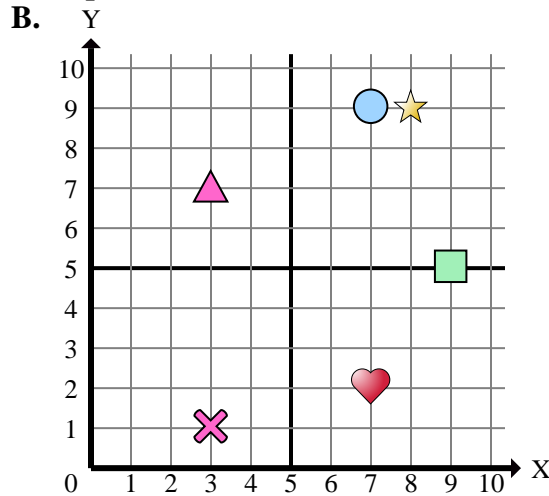
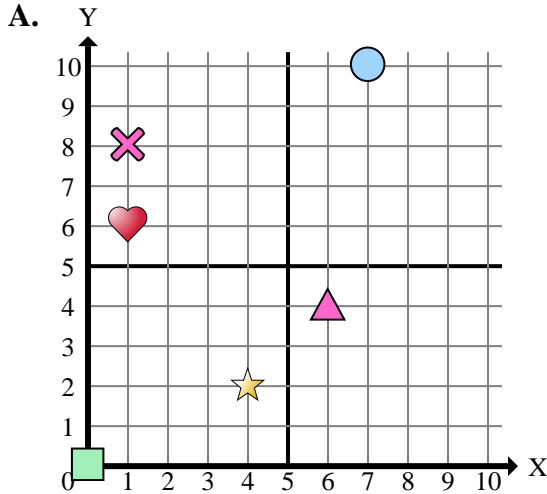
**Answers**

1. **C**
2. **D**
3. **A**
4. **D**
5. **C**
6. **A**
7. **A**
8. **B**
9. **B**
10. **C**
11. **D**
12. **A**
13. **D**
14. **D**
15. **D**

- 1) Which coordinate plane has a shape at (6 , 8)?
- 2) Which coordinate plane has a shape at (1 , 2)?
- 3) Which coordinate plane has a shape at (6 , 4)?
- 4) Which coordinate plane has a shape at (0 , 8)?
- 5) Which coordinate plane has a shape at (8 , 1)?
- 6) Which coordinate plane has a shape at (1 , 6)?
- 7) Which coordinate plane has a shape at (1 , 8)?
- 8) Which coordinate plane has a shape at (7 , 9)?
- 9) Which coordinate plane has a shape at (8 , 9)?
- 10) Which coordinate plane has a shape at (7 , 1)?
- 11) Which coordinate plane has a shape at (5 , 8)?
- 12) Which coordinate plane has a shape at (7 , 10)?
- 13) Which coordinate plane has a shape at (0 , 6)?
- 14) Which coordinate plane has a shape at (7 , 3)?
- 15) Which coordinate plane has a shape at (2 , 4)?



Determine which coordinate plane answers each question.

**Answers**

1. _____
2. _____
3. _____
4. _____
5. _____
6. _____
7. _____
8. _____
9. _____
10. _____

- 1) Which coordinate plane has a rectangle at (6 , 8)?
- 2) Which coordinate plane has a star at (1 , 2)?
- 3) Which coordinate plane has a triangle at (6 , 4)?
- 4) Which coordinate plane has a circle at (0 , 8)?
- 5) Which coordinate plane has a triangle at (8 , 1)?
- 6) Which coordinate plane has a heart at (1 , 6)?
- 7) Which coordinate plane has a cross at (1 , 8)?
- 8) Which coordinate plane has a circle at (7 , 9)?
- 9) Which coordinate plane has a star at (8 , 9)?
- 10) Which coordinate plane has a heart at (7 , 1)?